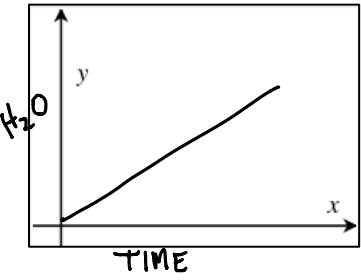
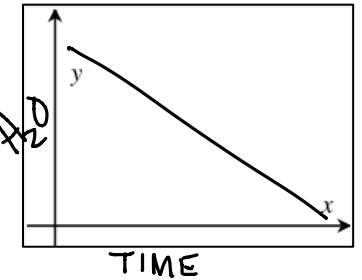
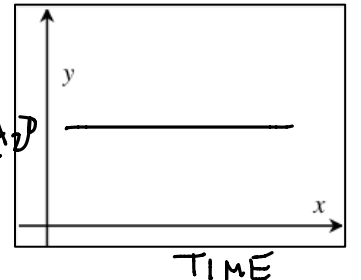


LEARNING OBJECTIVE: We will analyze graphs and tell stories, and sketch graphs based on stories told including linear and non-linear situations. (G8M6L3)

CONCEPT DEVELOPMENT:

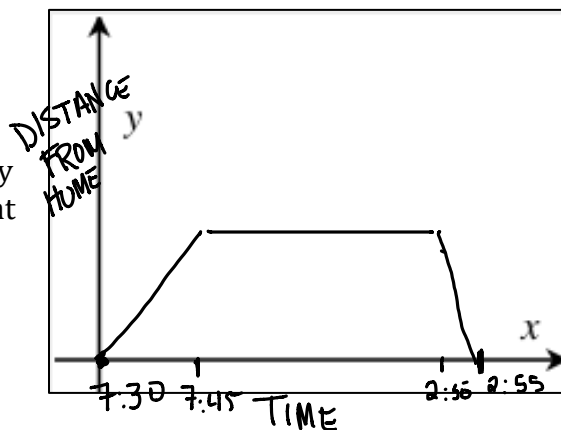
Functions are either increasing, decreasing or constant.

Linear Functions change at a constant rate (i.e. straight lines)

Increasing	Decreasing	Constant
		
<p>A linear function whose graph has a positive slope is said to be increasing.</p>	<p>A linear function whose graph has a negative slope is said to be decreasing.</p>	<p>A linear function whose graph has a zero slope is said to be constant.</p>
<p>Water is filling in a bathtub</p>	<p>Water is <u>draining</u> from a bathtub</p>	<p>Water is in a bathtub</p>

A **piecewise function** is a function where the rate changes based on the interval.

Example: Anna walked to school in 15 minutes at 7:30AM, stayed there all day until 2:50 and then got a ride home that took 5 minutes.



Non Linear Functions have a VARIABLE RATE OF CHANGE

Increasing	Decreasing
<p>When the stop light turned green, I sped up the car.</p>	<p>As I approached the stop light, I saw it was red, so I slowed down.</p>

QUESTION: In the above situations, how is speed represented?

SLOPE

Some non-linear functions will both increase and decrease based on the situation.

Examples:

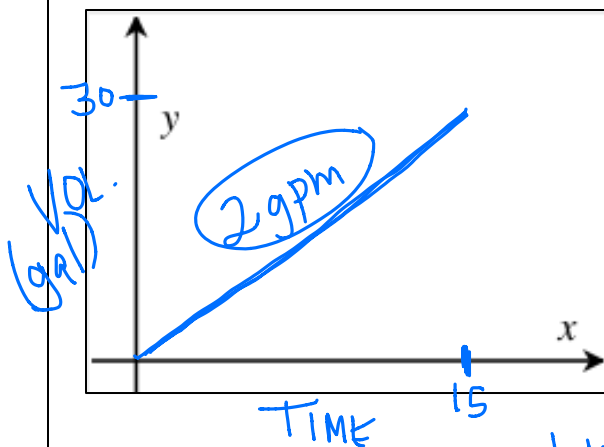
<p>Navi hit a three point shot. Show how far the ball is from the ground as a function of time.</p>	<p>Dolphins jump out of the water and dive back down. Graph the dolphins distance from the water line as a function of time.</p>

GUIDED PRACTICE:

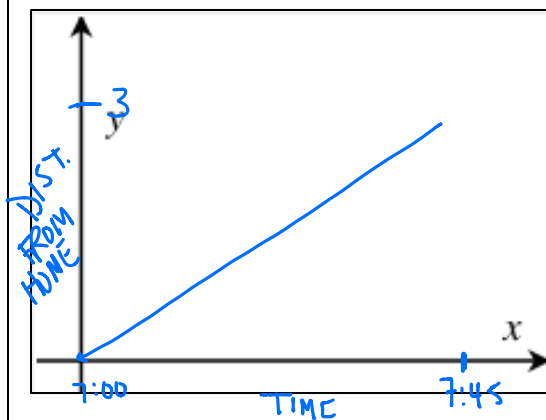
Steps for Graphing Functions Based on Qualitative Information

1. Read the scenario/story problem or study the graph very carefully.
2. Label your graph carefully and define your variables, or interpret the graph based on the story.

The amount of water in a bath tub is a function of the time that a faucet is on. A bathtub is filling with water at a constant rate of 2 gallons per minute. After 15 minutes have passed, there are 30 gallons in the tub.

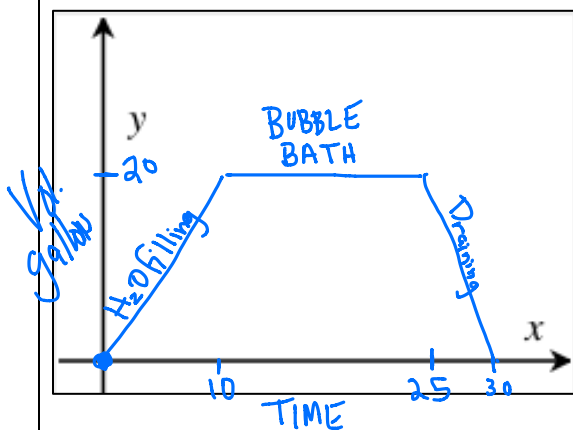


The distance a person is from home is a function of how many minutes they have walked away from home. Audrey begins walking away from home toward Graham at 7:00AM. In 45 minutes, she walks 3 miles.

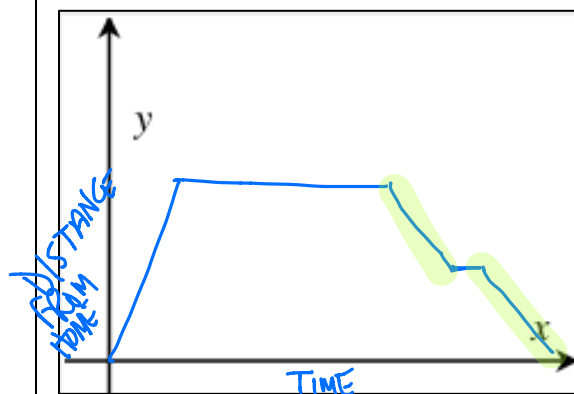


LINEAR INCREASING

A bathtub is filling at a constant rate of 2 gallons per minute. After 10 minutes, it has 20 gallons in it. After a 15 minute bath, the water drains out in 5 minutes.



Jessica gets a ride to school with her mom. The 2 mile trip takes 10 minutes. She arrives at school at 7:40AM. At 2:50, she walks home, but halfway home, she stops at Starbucks for a drink, and then continues on her way home.



NAME: _____


Math _____, Period _____

Mr. Rogove


Date: _____

INDEPENDENT PRACTICE:

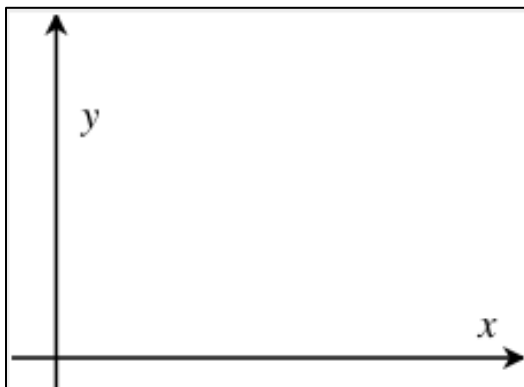
Ben is running on a rocky trail that is initially flat, but then leads to a steep mountain. Graph the total distance he runs as a function of time.




Madison Bumgarner goes to the top of a 8-story building and throws a baseball straight out (not up) from the building. Graph the height of the baseball from the ground as a function of time.



Graph your own story



Graph your own story



NAME: _____

Math _____, Period _____

Mr. Rogove

Date: _____

ACTIVATING PRIOR KNOWLEDGE:

Maybe use Exit ticket from Lesson 3 as APK?

CLOSURE:

Use Exit Tickets from Lesson 4 and 5.

TEACHER NOTES:

Map to Lesson 4, Mod 6, This maps loosely to Lesson 4 and 5.

Graphing Stories—after page 3. Do the following:

Water volume (linear), height of waist off the ground (adam poetzel), Distance from home plate, ponies in frame, height of waist off ground (Dan Meyer), Distance from camera (Adam Poetzel)

Also, work with Function Carnival.

Possibly have students do their own graphing stories??

Homework is from Lesson 5